


40



(.19:13-15, .10:13-16, .18:15-17)




: , ,
19:14




18:17).





Завдання 1



1.

?

2.

?

3.

?

4.

?

5.

?

6.

?

7.

?

8.

?

9.

?



Завдання 2

